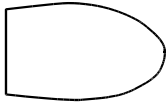
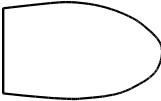




Relatives 7

Write the 6th degree of the major scale starting on each of these tonics:


F → 

E^b → 

B^b → 

A^b → 

Complete:
 The minor scale always begins on degree
 of its relative major scale
 and shares a signature.



Fill in this chart.

